

Identifier _____

cations

anions

Na + K

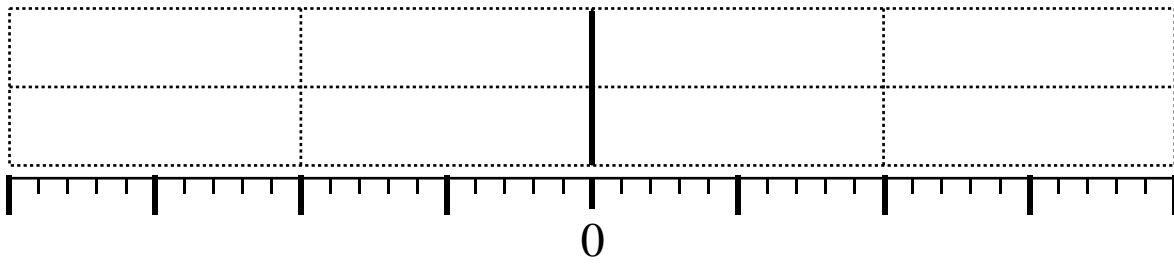
Cl + NO₃ + F

Ca

HCO₃ + CO₃

Mg

SO₄



Identifier _____

cations

anions

Na + K

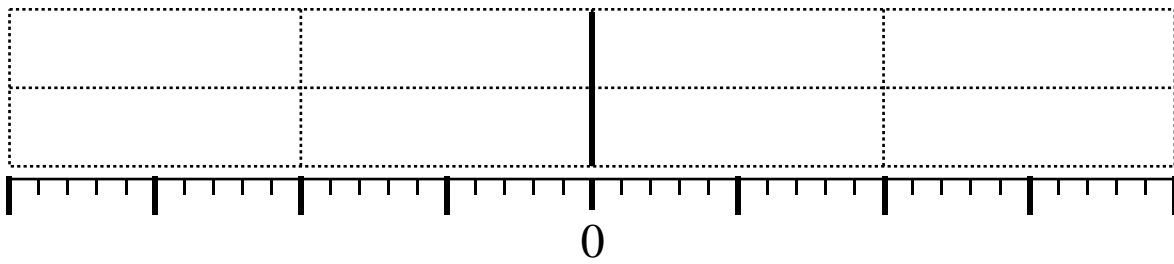
Cl + NO₃ + F

Ca

HCO₃ + CO₃

Mg

SO₄



Identifier _____

cations

anions

Na + K

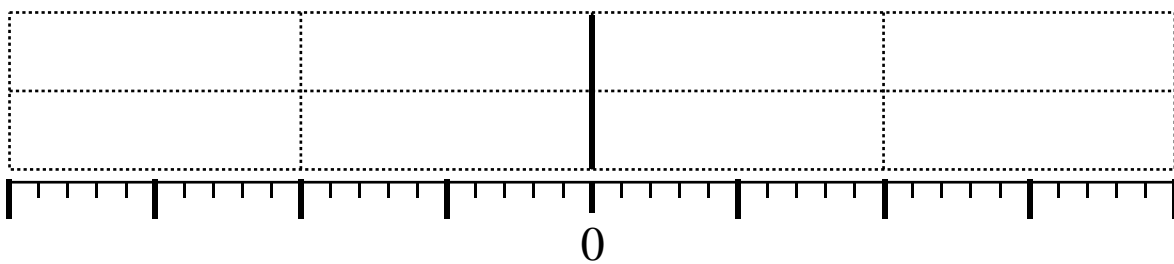
Cl + NO₃ + F

Ca

HCO₃ + CO₃

Mg

SO₄



Identifier _____

cations

anions

Na + K

Cl + NO₃ + F

Ca

HCO₃ + CO₃

Mg

SO₄

